
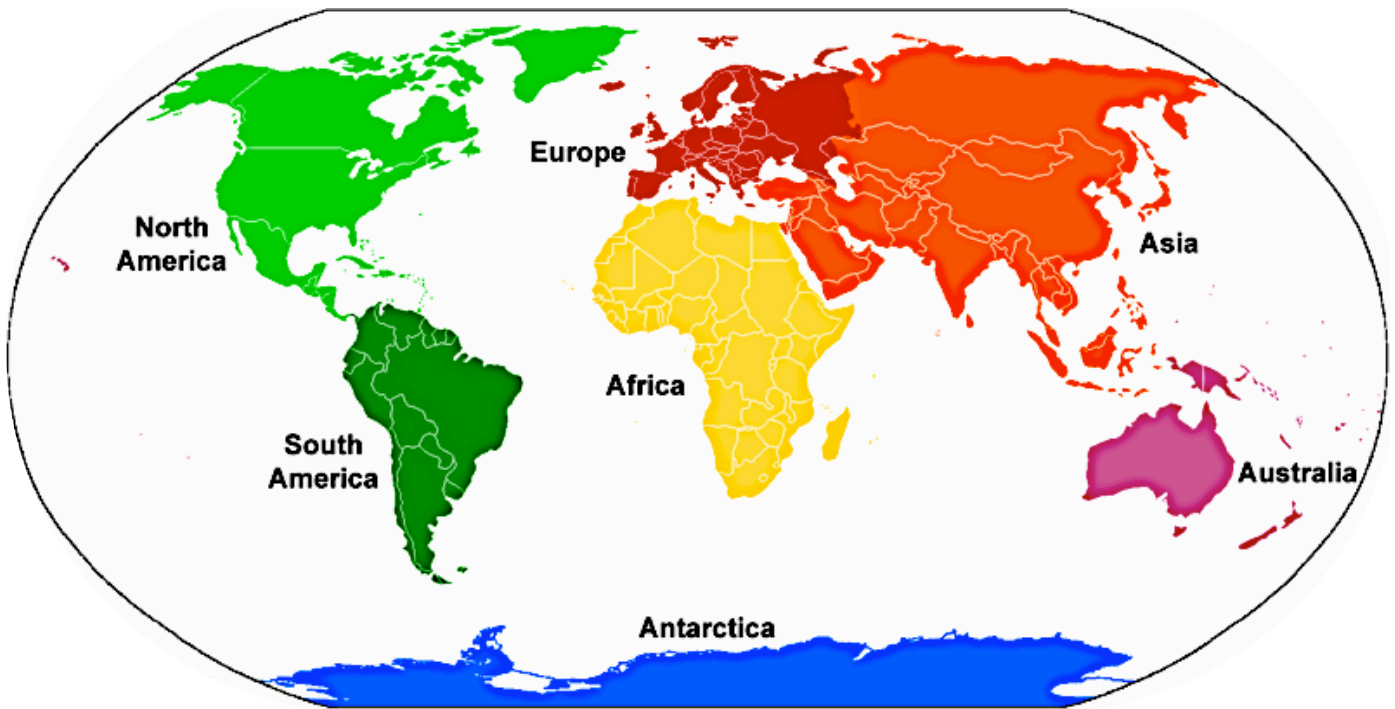


Name: _____ Date: _____




Use a map to see if you can find these mountain ranges. Can you spot which continent they are in? Use the map of continents below to help you.

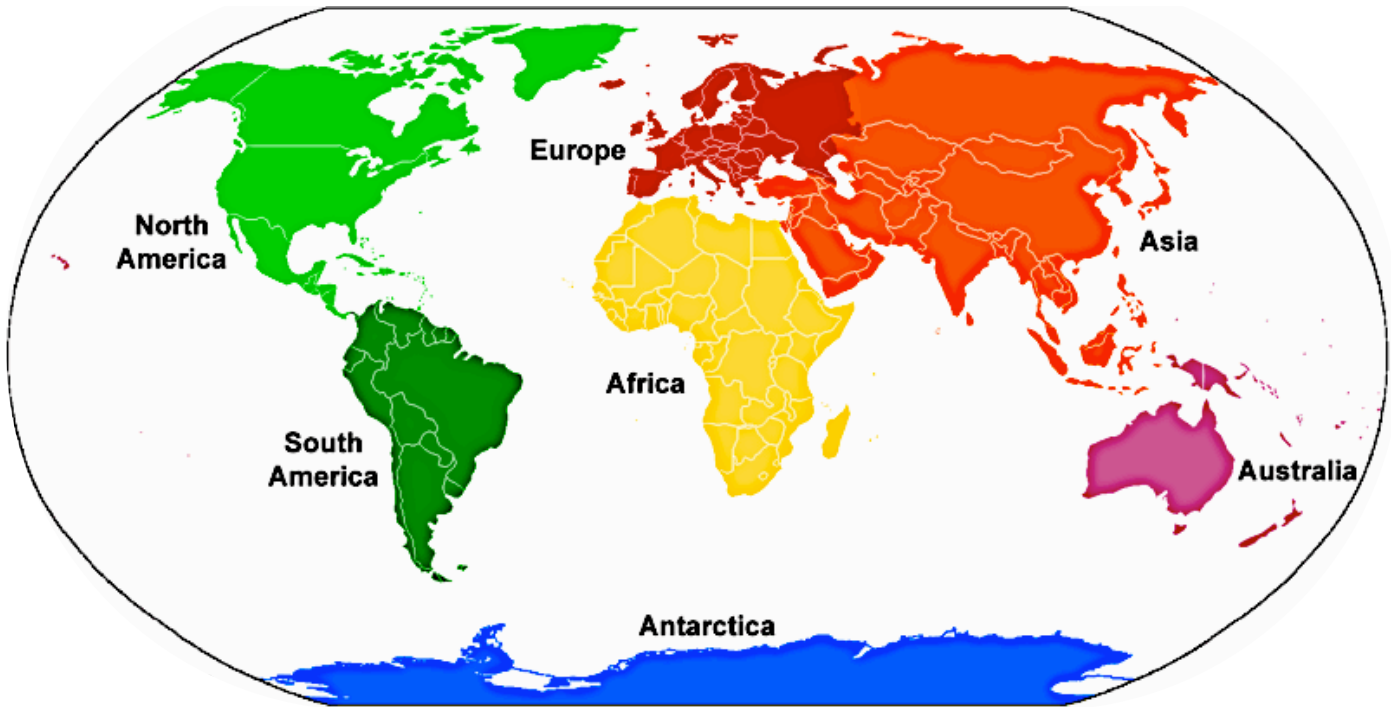


Mountain Range	Continent
The Himalayas	
The Alps	
The Andes	
The Rockies	
The Karakoram	
The Grampians	

Name: _____ Date: _____




Use a map to see if you can find these mountain ranges. Can you spot which continent and countries they are in? Use the map of continents below to help you.



Mountain Range	Continent	Country or Countries
The Himalayas		
The Alps		
The Andes		
The Rockies		
The Karakoram		
The Grampians		

Name: _____ Date: _____



Use a map to see if you can find these mountain ranges. Mark them on the world map below. Can you spot which continent and countries they are in?



Mountain Range	Continent	Country or Countries
The Himalayas		
The Alps		
The Andes		
The Rockies		
The Karakoram		
The Grampians		
The Pyrenees		
The Appalachians		
The Urals		
The Pennines		

Pakistan

**What country is
Ben Nevis in?**

Turkey

**In which country
would you find
K2?**

**North
America**

**What country is
Mount Everest
in?**

Scotland

**In which
continent would
you find the
Andes?**

Tanzania

**What country is
Mount Ararat
in?**

Japan

**In which
continent would
you find the
Himalayas?**

**South
America**

**What country is
Mount Fuji in?**

Nepal

**In which
continent would
you find the
Alps?**

Asia

**In which
continent would
you find the
Rocky
Mountains?**

Europe

**What country is
Mount
Kilimanjaro in?**