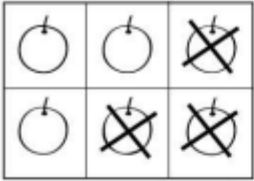
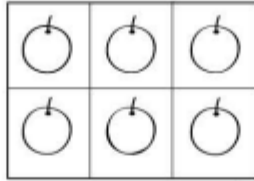


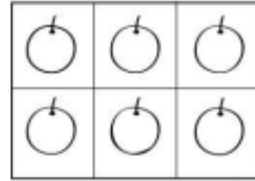
Example



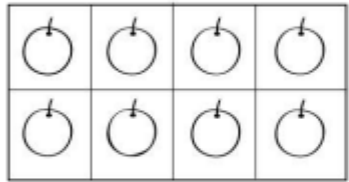
$$6 - 3 = \square$$



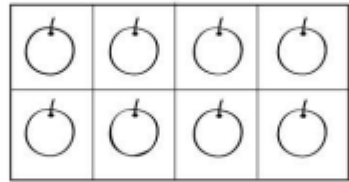
$$6 - 1 = \square$$



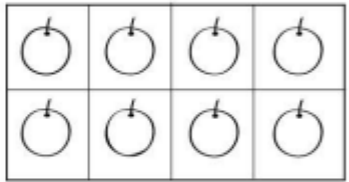
$$6 - 4 = \square$$



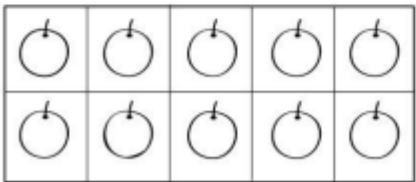
$$8 - 3 = \square$$



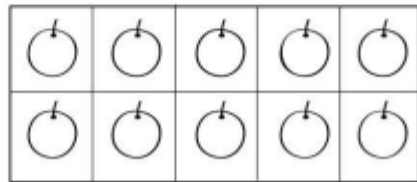
$$8 - 1 = \square$$



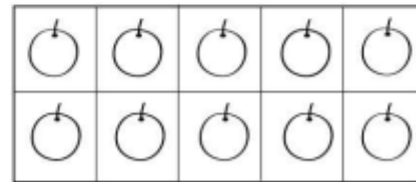
$$8 - 5 = \square$$



$$10 - 5 = \square$$



$$10 - 3 = \square$$



$$10 - 2 = \square$$